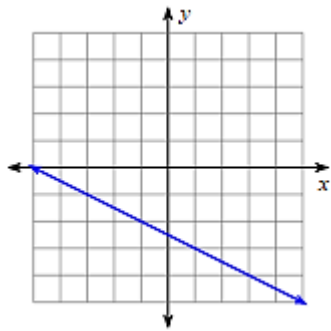


### Slope Remediation Practice

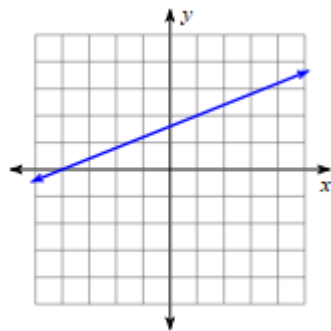
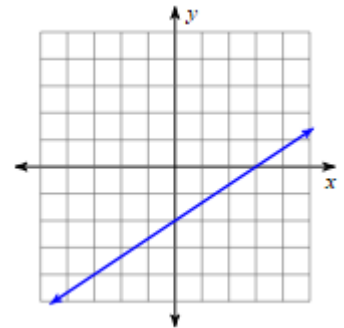


X	Y
3	6
3	4
3	2
3	0
3	-2

$(-1, -2)$  and  $(2, 7)$

X	Y
-2	-3
0	3
2	9
6	21
10	33

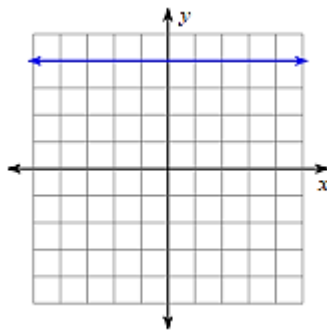
$(2, -3)$  and  $(0, -2)$



$(-5, 2)$  and  $(1, -2)$

X	Y
-4	4
-1	3
2	2
5	1
8	0

$(9, -5)$  and  $(9, 1)$



X	Y
6	2
3	2
0	2
-3	2
-6	2

$(3, -2)$  and  $(5, -2)$

X	Y
-4	6
0	4
4	2
8	0
12	-2

